

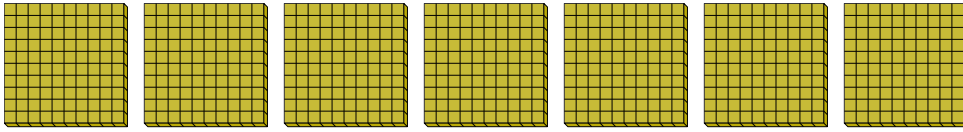


Use the groups to answer each question.

Answers

1) a. How many groups of 100 are there?

b. How many small blocks are there total?

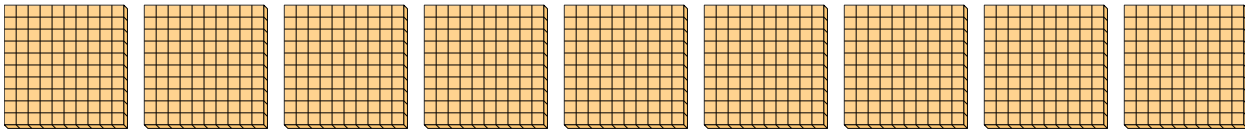


1a. _____

1b. _____

2) a. How many groups of 100 are there?

b. How many small blocks are there total?

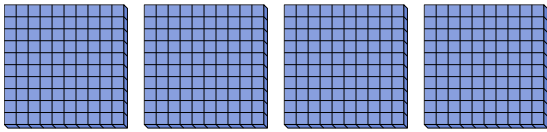


2a. _____

2b. _____

3) a. How many groups of 100 are there?

b. How many small blocks are there total?

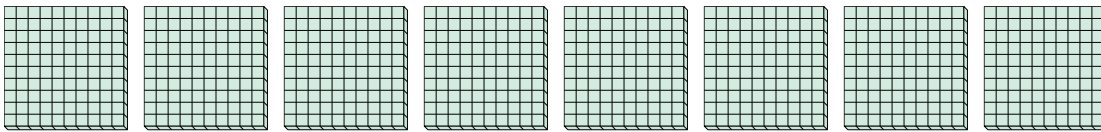


3a. _____

3b. _____

4) a. How many groups of 100 are there?

b. How many small blocks are there total?

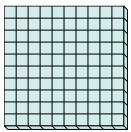


4a. _____

4b. _____

5) a. How many groups of 100 are there?

b. How many small blocks are there total?

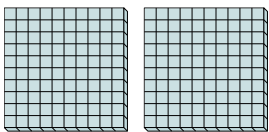


5a. _____

5b. _____

6) a. How many groups of 100 are there?

b. How many small blocks are there total?




6a. _____

6b. _____

7) a. How many groups of 100 are there?

b. How many small blocks are there total?



7a. _____

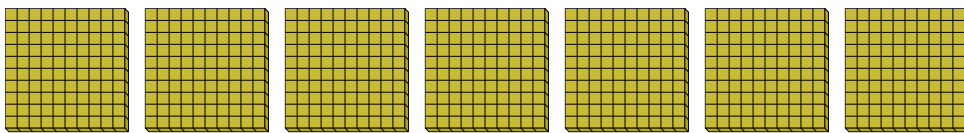
7b. _____



Use the groups to answer each question.

1) a. How many groups of 100 are there?

b. How many small blocks are there total?

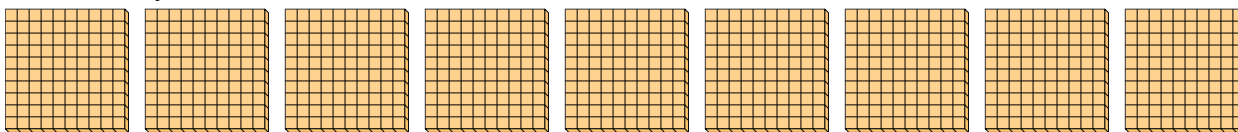


1a. 7

1b. 700

2) a. How many groups of 100 are there?

b. How many small blocks are there total?

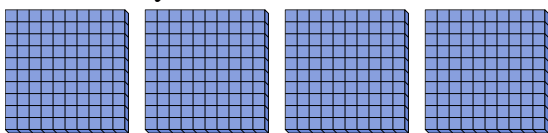


2a. 9

2b. 900

3) a. How many groups of 100 are there?

b. How many small blocks are there total?

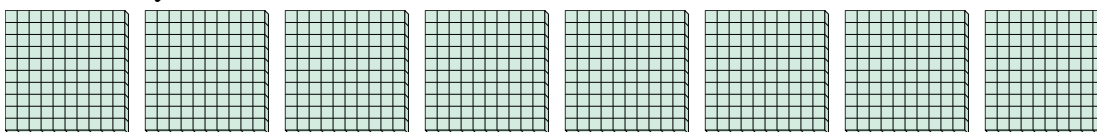


3a. 4

3b. 400

4) a. How many groups of 100 are there?

b. How many small blocks are there total?

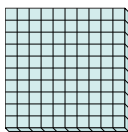


4a. 8

4b. 800

5) a. How many groups of 100 are there?

b. How many small blocks are there total?

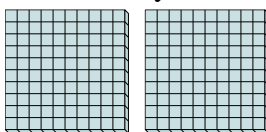


5a. 1

5b. 100

6) a. How many groups of 100 are there?

b. How many small blocks are there total?

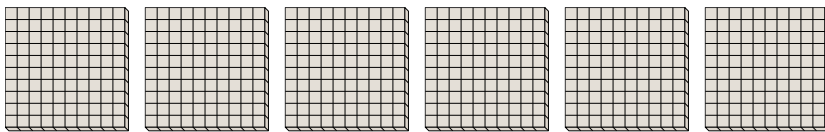


6a. 2

6b. 200

7) a. How many groups of 100 are there?

b. How many small blocks are there total?



7a. 6

7b. 600

Answers